




Learning with Landy

Maths


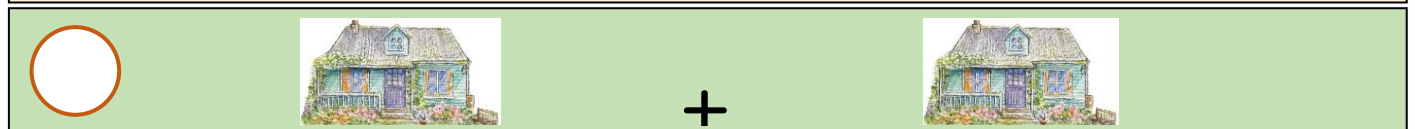
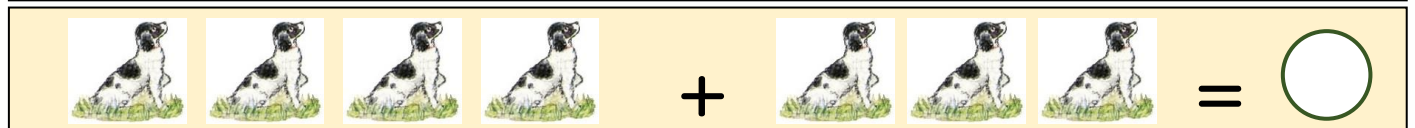
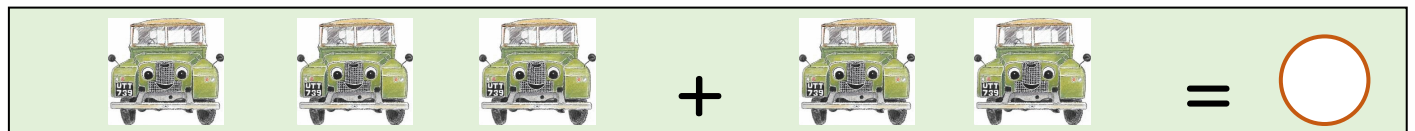

Write your answers in the circles:




+



+



Learning with Landy



Number Sentences

Use drawings and numbers to work out the answers:

- 1) Landy, Pickup and Tractor have 4 wheels and one steering wheel each. How many wheels do they have altogether?



- 2) 8 ducks waddled to the pond for a swim. They each had 2 legs. How many legs jumped into the water altogether?



- 2) Landy's number plate is UTT 739. Can you add up the three numbers and write the answer below?



Learning with Landy



Number Sentences

4) Landy was taking 9 piglets and 5 lambs to the farm. When he arrived at the farm, he found 4 piglets had jumped out. How many animals were still left in the back of Landy?



5) In Jack's shed there's a rake, 3 spades, 2 saws, a garden fork and a wheel barrow. He took the rake and wheelbarrow into the garden. How many tools are left in the shed?



6) There are 31 green beans growing on the beanpoles. Jack picks 19 beans. How many are left?

Learning with Landy



Number Sentences


7) Jack hung out 3 T shirts, 4 socks and 3 towels on his washing line. The wind blew a T shirt and 3 socks off the line.

How many items were still on the line?




8) There were 5 ducks, 4 sheep and 3 hens in the field with Landy. A duck went for a swim and 2 hens walked back to the farmyard.

How many animals were left talking to Landy?



9) In Jack's tool box there are 15 spanners, 8 screwdrivers, a hammer, 2 clamps and a wrench. He loses a spanner and two screwdrivers. Then he buys a pair of pliers. How many tools has he now got in his tool box?




Learning with Landy



Number Sentences

10) Jack and Landy picked up 10 bales of hay and 14 fence poles. They gave 3 bales and 6 poles to a friend. How many items were left in the back of Landy?



11) Molly dug up 8 carrots, 5 leeks and 7 turnips. How many vegetables did she dig up altogether?



12) The rabbits in Jack's garden ate 13 lettuces, 16 carrots and 27 radishes in a month. How many vegetables did they eat altogether?



Learning with Landy



Number Sentences

13) Jack planted 7 rows of carrots, 9 rows of leeks and 12 rows of spinach. The slugs ate 4 rows of spinach and 1 row of carrots. How many rows were left?



14) There were 24 sheep grazing in a field. 18 of them had a baby lamb each and 5 of them had twins. How many sheep and lambs were there altogether in the field?



15) There were 89 cows on the farm. After James had sold some of them at the market, he only had 42 cows left. How many had he sold?





Picture answers:



Number Sentences:

1) 15

2) 16

3) 19

4) 10

5) 6

6) 12

7) 7

8) 9

9) 25

10) 15

11) 20

12) 56

13) 23

14) 52

15) 47